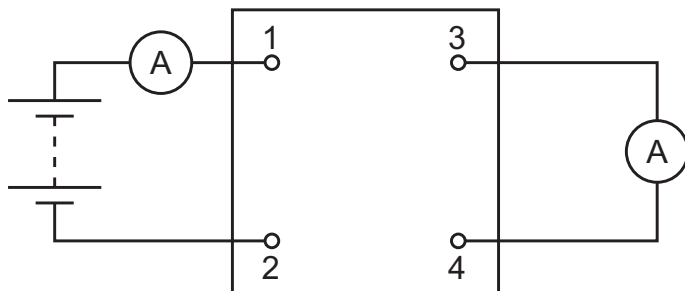


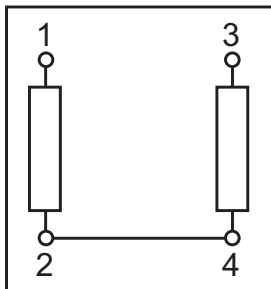
36 The diagram shows a four-terminal box connected to a battery and two ammeters.



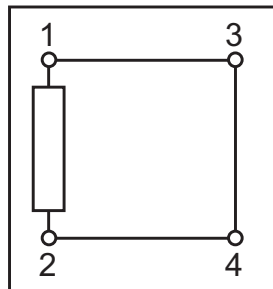
The currents in the two ammeters are identical.

Which circuit, within the box, gives this result?

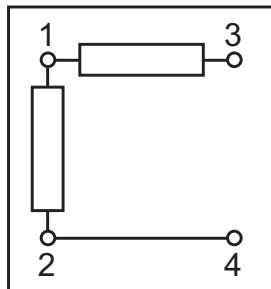
**A**



**B**



**C**



**D**

