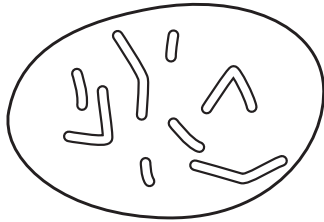
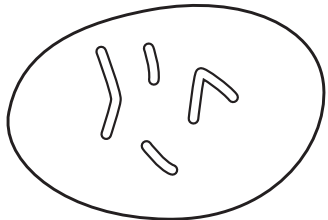


29 The diagram shows the chromosomes in the nucleus of a cell that divides by mitosis.

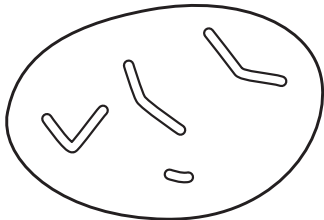


Which diagram shows the chromosomes in the nucleus of one of the daughter cells produced?

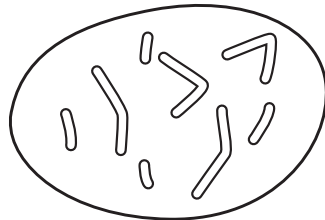
A



B



C



D

