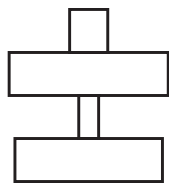
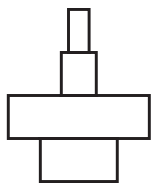


- 36** In a food chain, zebras are large mammals that eat grass. The zebras have many insects living on them which suck their blood. Birds eat the insects.

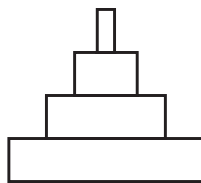
The diagrams show some biological pyramids.



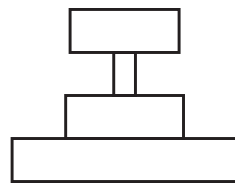
1



2



3



4

Which row identifies the types of pyramids for this food chain?

	pyramid of energy	pyramid of numbers
A	4	2
B	3	2
C	3	1
D	4	1