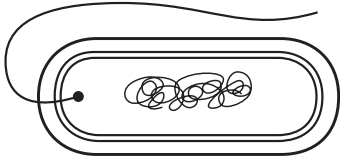


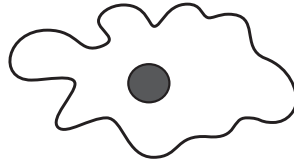
2 The diagrams show four organisms.

Which organism is a prokaryote?

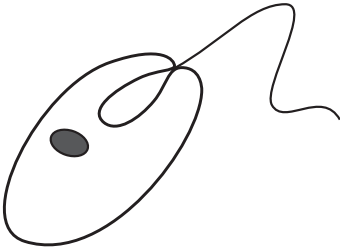
A



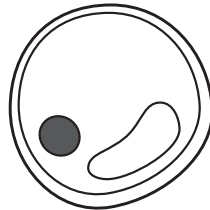
B



C



D



NOT TO
SCALE