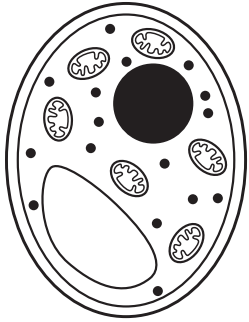
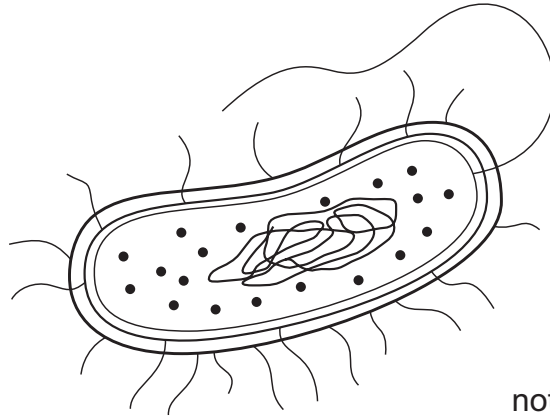


2 The diagrams show cells of organisms from three different kingdoms.

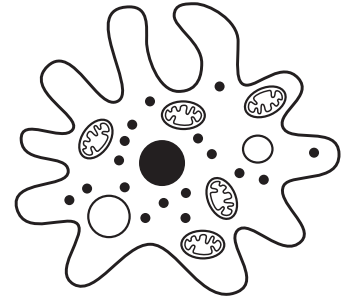


1



2

not to scale



3

Which row shows the kingdoms for the organism cells labelled 1, 2 and 3?

	cell 1	cell 2	cell 3
A	fungus	protocist	prokaryote
B	fungus	prokaryote	protocist
C	prokaryote	fungus	protocist
D	prokaryote	protocist	fungus