


7 The diagrams show the same mass of oil arranged in drops of different sizes at the same temperature.

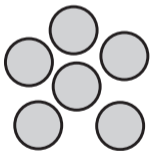
In which combination of oil drop size and enzyme will the oil be digested the fastest?

A




trypsin

B



lipase

C



lipase

D



trypsin