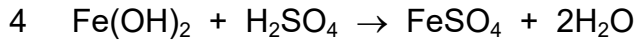
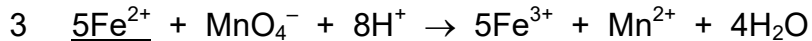
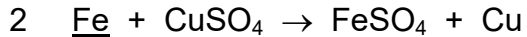


17 Which equations show the underlined species acting as a reducing agent?



A 1 and 2

B 1 and 4

C 2 and 3

D 3 and 4