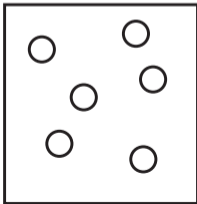


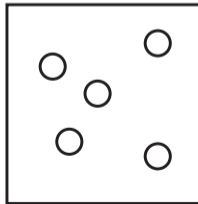
- 1 The diagrams show containers of gas at the same temperature. All containers have the same size.

Which container contains gas at the highest pressure?

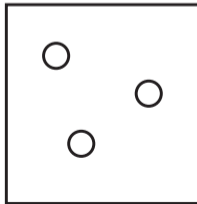
A



B



C



D

