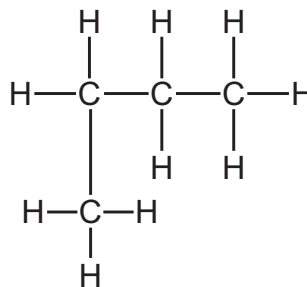
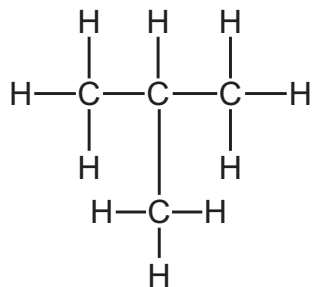
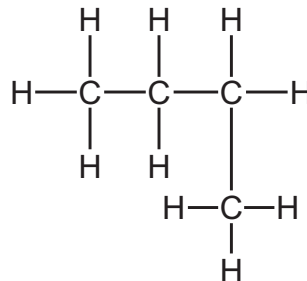
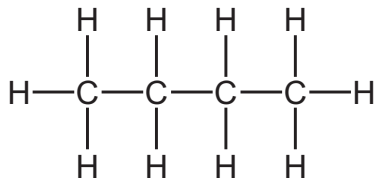


34 Which structures are structural isomers of each other?



- A 1, 2, 3 and 4
- B 1, 2 and 4 only
- C 1 and 3 only
- D 2 and 4 only