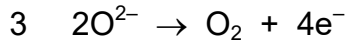
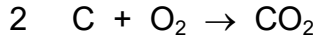
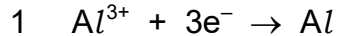


33 Three different reactions that occur during the extraction of aluminium from purified bauxite are listed.



Which reactions occur at the anode?

A 1 and 2

B 1 only

C 2 and 3

D 3 only