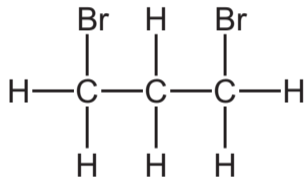
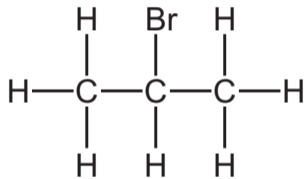


**36** Propene undergoes addition reactions with bromine, hydrogen and steam.

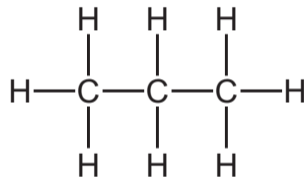
Which structures represent a product of these reactions?



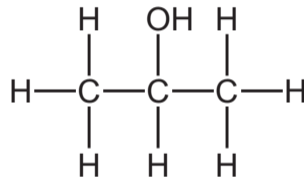
1



2



3



4

**A** 1 and 3

**B** 1 and 4

**C** 2 and 3

**D** 3 and 4