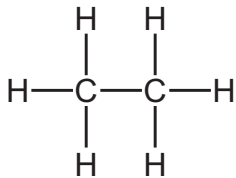
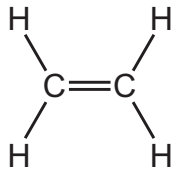


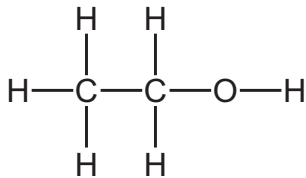
**37** The structures of four compounds are shown.



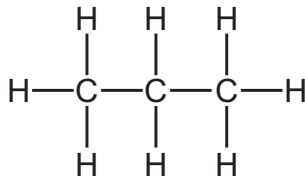
1



2



3



4

Which compounds are members of the same homologous series?

- A** 1, 2 and 3      **B** 1 and 2 only      **C** 1 and 4      **D** 2 and 4