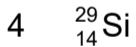
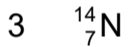
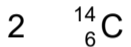
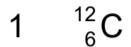


4 The symbols of four atoms are listed.



Which atoms have more neutrons than protons?

A 1 and 2

B 2 and 3

C 2 and 4

D 3 and 4