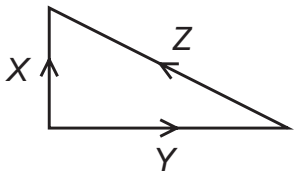
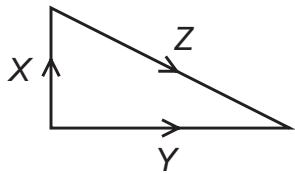


1 Which vector diagram correctly shows the force  $Z$  as the resultant of forces  $X$  and  $Y$ ?

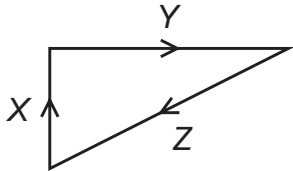
**A**



**B**



**C**



**D**

