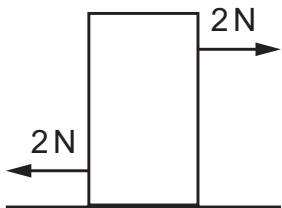
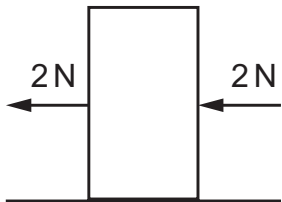


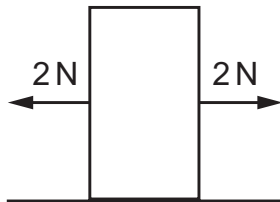
- 6 The diagrams E–H show a block of wood on a frictionless surface. In each diagram, the block has two forces acting on its sides.



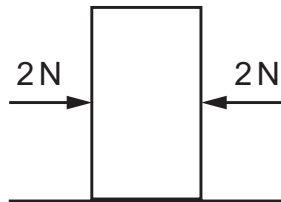
E



F



G



H

Which diagrams show the block in equilibrium?

- A E, F, G and H
- B E, G and H only
- C E and F only
- D G and H only